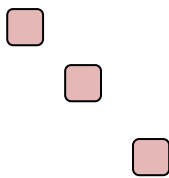
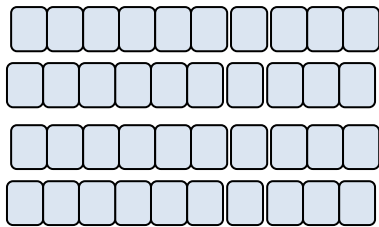


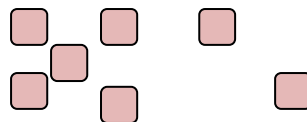
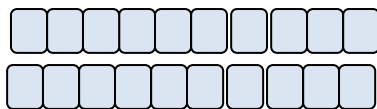
Prénom.....

Dizaines, unités

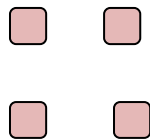
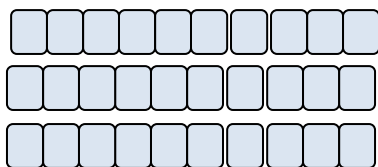
Compte le nombre blocs de carrés de dix et note le chiffre dans la case **dizaine**. Compte le nombre de carrés restant et note le chiffre dans la case **unité**.



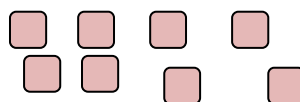
--	--



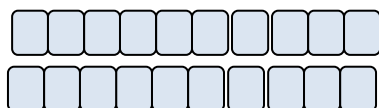
--	--



--	--



--	--

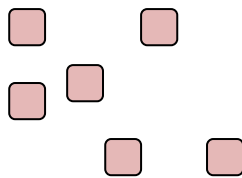
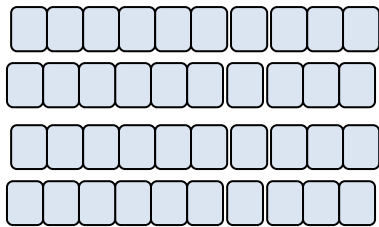


--	--

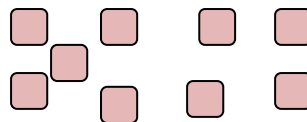
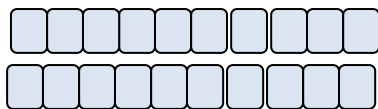
Prénom.....

Dizaines, unités

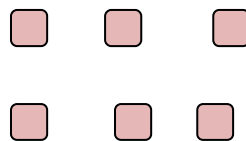
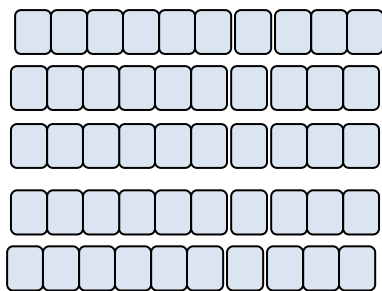
Compte le nombre blocs de carrés de dix et note le chiffre dans la case **dizaine**. Compte le nombre de carrés restant et note le chiffre dans la case **unité**.



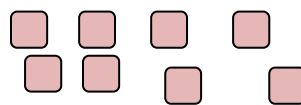
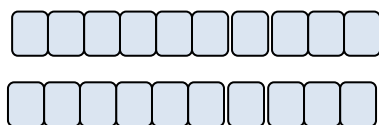
--	--



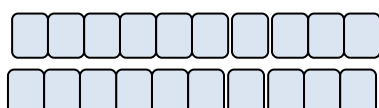
--	--



--	--



--	--

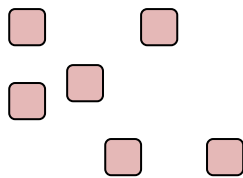
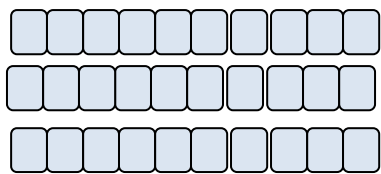


--	--

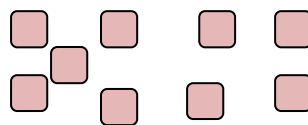
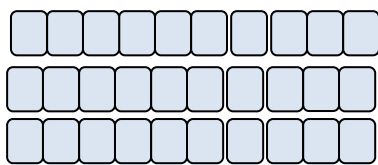
Prénom.....

Dizaines, unités

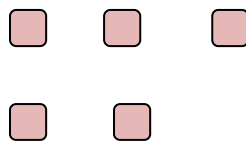
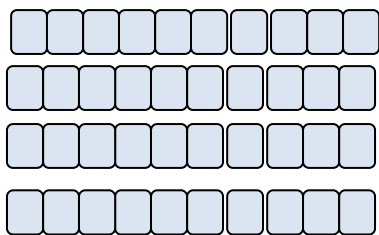
Compte le nombre blocs de carrés de dix et note le chiffre dans la case **dizaine**. Compte le nombre de carrés restant et note le chiffre dans la case **unité**.



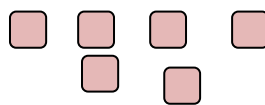
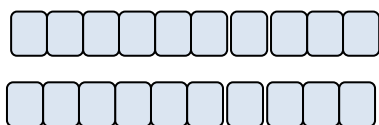
--	--



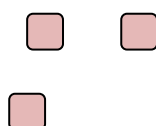
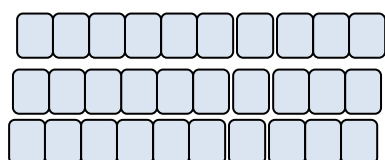
--	--



--	--



--	--

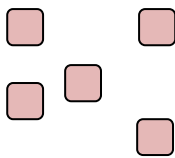
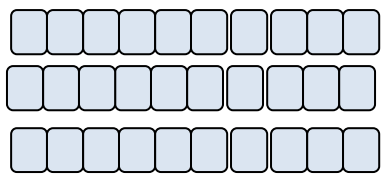


--	--

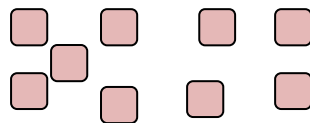
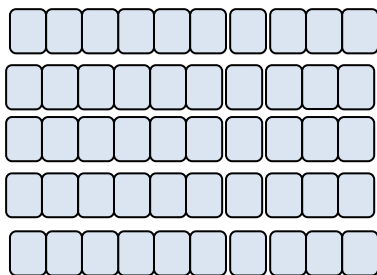
Prénom.....

Dizaines, unités

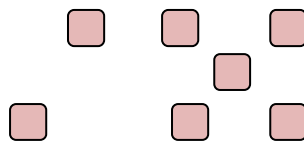
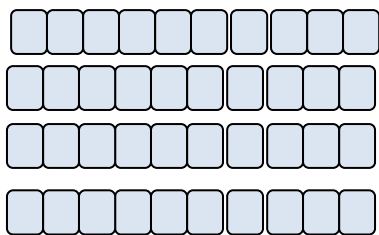
Compte le nombre blocs de carrés de dix et note le chiffre dans la case **dizaine**. Compte le nombre de carrés restant et note le chiffre dans la case **unité**.



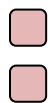
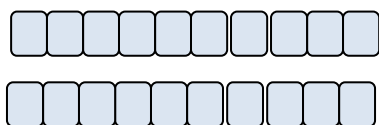
--	--



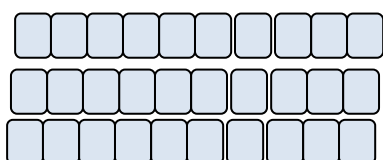
--	--



--	--



--	--

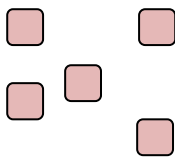
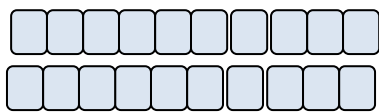


--	--

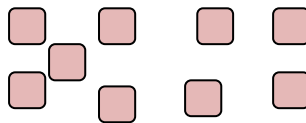
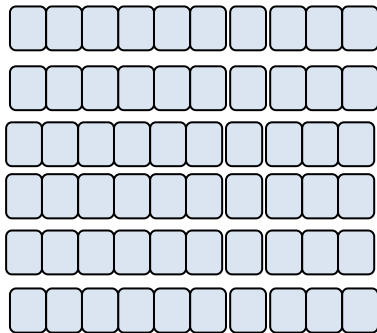
Prénom.....

Dizaines, unités

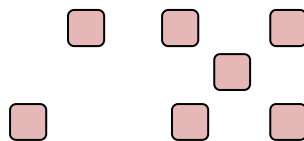
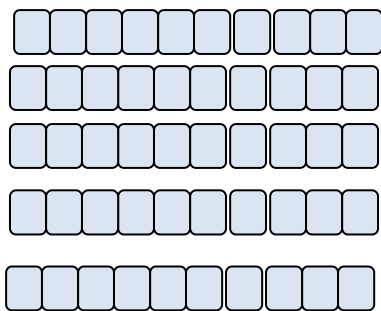
Compte le nombre blocs de carrés de dix et note le chiffre dans la case **dizaine**. Compte le nombre de carrés restant et note le chiffre dans la case **unité**.



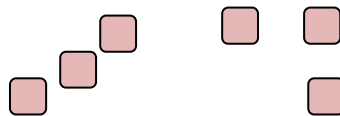
--	--



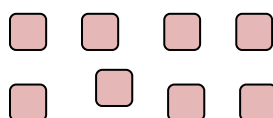
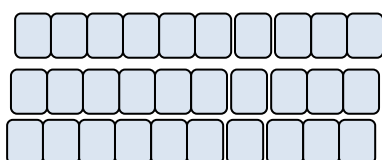
--	--



--	--



--	--

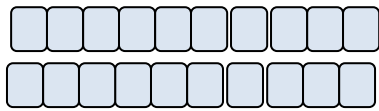


--	--

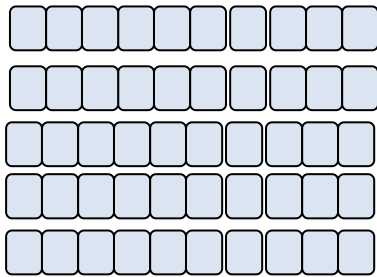
Prénom.....

Dizaines, unités

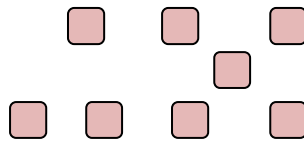
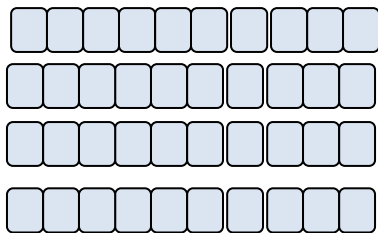
Compte le nombre blocs de carrés de dix et note le chiffre dans la case **dizaine**. Compte le nombre de carrés restant et note le chiffre dans la case **unité**.



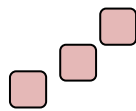
--	--



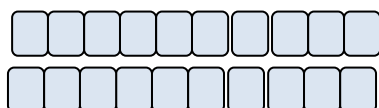
--	--



--	--



--	--



--	--